


# Quack Attack Shake and Spill

**Choose** a target number and put that many counters in the cup.

**Shake the cup** and **spill** the counters on the mat.

**Describe** the counters on the duck and off the duck.



4 counters on  
the duck.

2 counters off  
the duck.


4 and 2 make  
6.

Graphics by Scrappin Doodles license 56424,  
<http://www.scrappindoodles.com>

© 2012 Donna Boucher. All rights reserved.

<http://mathcoachcorner.blogspot.com/>


# Quack Attack Shake and Spill



Graphics by Scrappin Doodles license 56424, <http://www.scrappindoodles.com>

© 2012 Donna Boucher. All rights reserved.


<http://mathcoachscorner.blogspot.com/>



Name: \_\_\_\_\_

Draw the counters and finish the sentence

	_____ and _____ make _____ .
	_____ and _____ make _____ .
	_____ and _____ make _____ .
	_____ and _____ make _____ .
	_____ and _____ make _____ .
	_____ and _____ make _____ .



Name: \_\_\_\_\_

Draw the counters and write a number sentence

	$\underline{\quad\quad} + \underline{\quad\quad} = \underline{\quad\quad}$
	$\underline{\quad\quad} + \underline{\quad\quad} = \underline{\quad\quad}$
	$\underline{\quad\quad} + \underline{\quad\quad} = \underline{\quad\quad}$
	$\underline{\quad\quad} + \underline{\quad\quad} = \underline{\quad\quad}$
	$\underline{\quad\quad} + \underline{\quad\quad} = \underline{\quad\quad}$
	$\underline{\quad\quad} + \underline{\quad\quad} = \underline{\quad\quad}$
	$\underline{\quad\quad} + \underline{\quad\quad} = \underline{\quad\quad}$